

Available Marks	Total Marks Gained
100	



Entrant Name

New Zealand Music Examinations Board

THEORY - FOURTH GRADE

Time: 9.30am- 12.30pm

Saturday 13th June 2020


Time Allowed: 3 Hours

Write your name in the box labelled 'Entrant Name'

Question 1	TIME and RHYTHM	Total Marks
		14

A		6	
----------	--	----------	--

Complete these bars with rests.



B		4	
----------	--	----------	--

Add a time signature and barlines to this four bar melody.



C		4	
----------	--	----------	--

Group these notes correctly to make a four bar melody

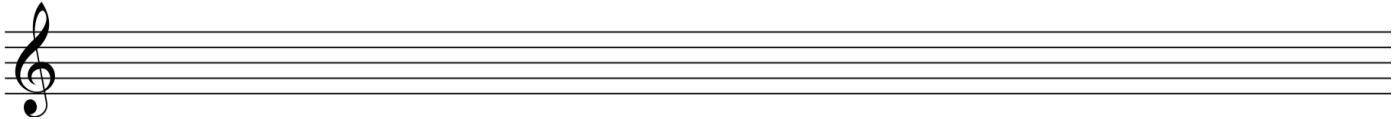
- Add the correct time signature
- Add the barlines



Question 2**SCALES and MODULATION****Total Marks
10****A****4**

Write B flat harmonic minor scale.

- Use accidentals, not the key signature
- Use crotchets
- Write one octave ascending and one octave descending
- Mark each tone with a slur

**B****4**

Write the following key signatures then write the notes as indicated.

- Use minims

C sharp minor
Leading noteA flat major
DominantD minor
SubmediantF sharp major
Leading note**C****2**

The following melody modulates and ends in a new key. State:

- The name of the new key
- The relationship of the new key to the original tonic key



New key: _____ Relationship to original tonic key: _____

Question 3**INTERVALS****Total Marks**
11**A****3**

Name the following harmonic intervals (eg. major 3rd) written above the given tonic notes.

**B****4**

Write these intervals as melodic intervals above the given note.



Perfect 4th

Augmented 5th

Diminished 3rd

Minor 6th

C**2**


Write the inversions of the following two harmonic intervals.

- Name the inversions


**Question 4****CADENCES and HARMONY****Total Marks**
23**A****8**

Write the following cadences

- Use accidentals not key signatures
- Use crotchets



Interrupted Cadence
G minor
Four part vocal style




Plagal Cadence
F sharp minor
Pianoforte style


Question 4**CADENCES and HARMONY contd.****B****6**

Write the following chords in four part vocal style.

- Use minims
- Write the correct key signatures



B minor
Chord V
Root position



D flat major
Chord VI
First inversion

C**9**


Complete the following in four part vocal style - S A T B – writing the appropriate cadence at the end of each phrase.

A musical staff with a treble clef and a bass clef, in 4/4 time and B-flat major key. The treble staff contains a melodic line with a slur over the first two measures and another slur over the last two measures. The bass staff is empty, intended for the student to complete the four-part vocal style.

Question 5**MEMORY****Total Marks 8****A****8**


Write "God Defend New Zealand"

- Do not write the words
- Use phrasing
- Use the treble clef

**Question 6****TRANSPOSITION****Total Marks 8****B****8**

Transpose the following melody up into the key of C minor

- Write the new key signature



Question 7

COMPOSITION

Total Marks
10

EITHER

10

- Write a melody in G major to the following verse.
- Write the words clearly under the notes
 - Use hyphens for words of more than one syllable
 - Use phrase mark

*"Music should be beautiful
Uplifting like the tui's call"*

OR

10

- Write a melody in F major to the following rhythm pattern.
- Add phrase marks
 - Add an appropriate tempo word

A

5

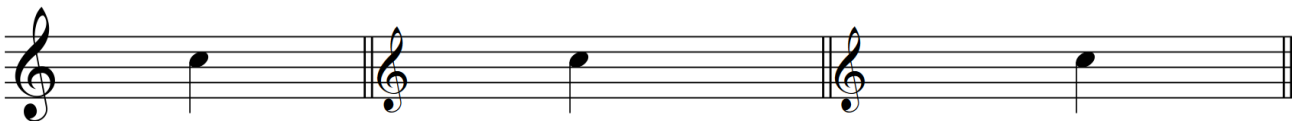
Give the meaning of each of these terms

- *Scherzando* _____
- *Subito* _____
- *Sotto voce* _____
- *Stringendo* _____
- *Sul tasto* _____

B

3

Write the following ornaments as indicated over the notes.



Appoggiatura


Acciaccatura

Mordent (upper)


C

2

Write open string tunings for these two string instruments using the appropriate clefs.



Violin



Viola

D

2

Give the meaning of these string terms

Tremelo _____

Pizzicato _____

E

3

a) Name three things that the movements of the Baroque Suite have in common.

b) Give the order of the first three movements of the Baroque Suite
