

Available Marks	Total Marks Gained
100	



Entrant Name

New Zealand Music Examinations Board

THEORY - FIRST GRADE

Time: 9.30am- 10.30am

Saturday 29th October 2022

Time Allowed: 1 Hour

Write your name in the box labelled 'Entrant Name'

Question 1	TIME and RHYTHM	Total Marks 16	
-------------------	------------------------	-----------------------	--

A		6	
----------	--	----------	--

Under each of the notes write its time name (eg semibreve, minim, crotchet, quaver)
Next to each of the notes at a) and c) write a rest that has the same time value.



B		3	
----------	--	----------	--

Complete the following bars with a rest or rests in the correct order.



3	
----------	--

Add one rest at each of the places marked * to make the bars complete.




C		4	
----------	--	----------	--

Add a time signature to each of the following melodies.




Question 2**PITCH****Total Marks 18****A**

Name these notes. Use words for sharps, flats and naturals.

6

Example: C sharp _____

6**B**

Write the following notes as crotchets.

6A flat
in a spaceF natural
on a lineD flat
below the staffC flat
above the staffG natural
in a spaceB sharp
on a line**Question 3****KEYS and SCALES****Total Marks 20****A**

Write the scale of C major beginning in a space

5


- Use semibreves
- Write one octave ascending
- Mark each tone with a slur
- Draw a circle around the 6th degree of the scale

**B**

Write the major scale that begins on the given note

5

- Write the key signature
- Use minims
- Write one octave descending
- Mark each semitone with a slur
- Draw a circle around the 4th degree of the scale




Question 3**KEYS and SCALES continued****C****10**

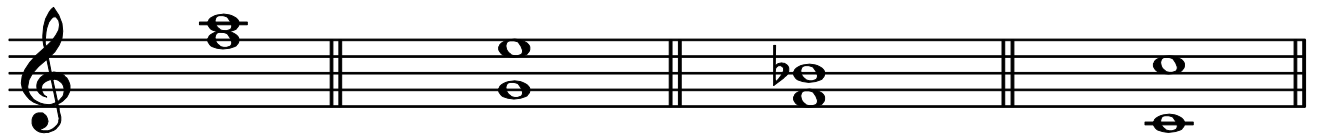
Write the scale degree numbers under the notes of this melody (eg 1, 2, 3, 4, etc)

**Question 4****INTERVALS and TRIADS****Total Marks 12****A****4**

Write one note above each of the given notes to make the following intervals.

**B****4**


Number the following intervals (eg 2nd)

**C****4**

On the staff marked (a)

- Write a treble clef
- Write the tonic triad of C major


(a)



On the staff marked (b)

- Write the key signature of F major
- Write the tonic triad of F major



(b)




Question 5**MEMORY****Total Marks 10****A****10**

Write the song "Happy Birthday to You" from memory

- Do not write the words
- Include the phrasing

**Question 6****TRANSPOSITION****Total Marks 10****A****10**

Transpose this melody up into the key of C Major.



A

10

The following melody is written in the key of G major

a) Complete it by adding:

- i. The key signature of G Major
- ii. The time signature
- iii. A tempo word above bar 1 that means 'very fast'
- iv. A sign below bar 1 to show the melody begins loudly

1	
1	
1	
1	

b) Answer the following questions:

3

i) Which note is not in G major _____

ii) What does the sign under bars 5 and 6 mean? _____

iii) What does the word under bar 7 mean? _____

c) Give the meaning of the following terms and signs:

3

i) The dots over the notes in bar 3 _____

ii) The curved line between bars 6 and 7 _____

iii) The curved lines in bars 1 and 2 _____

B**4**

Give the English meaning of the following terms:

i. *Andante* _____

ii. *Ritenuo* _____

iii. *Piano* _____

iv. *Moderato* _____